






Name: _____ Class: _____



Use the picture graphs to answer each question.

Favourite Animal at the Fair

horses	
cows	
sheep	

- How many people said horses are their favourite animal at the fair? _____
- How many people said sheep are their favourite animal at the fair? _____
- How many people like horses more than like cows? _____
- How many people were asked about their favourite animal? _____

Pie Contest Entries

apple	
cherry	
peach	

- How many apple pies are entered in the contest? _____
- How many cherry pies are entered in the contest? _____
- How many more apple pies are there than peach? _____
- How many pies are entered in all? _____

